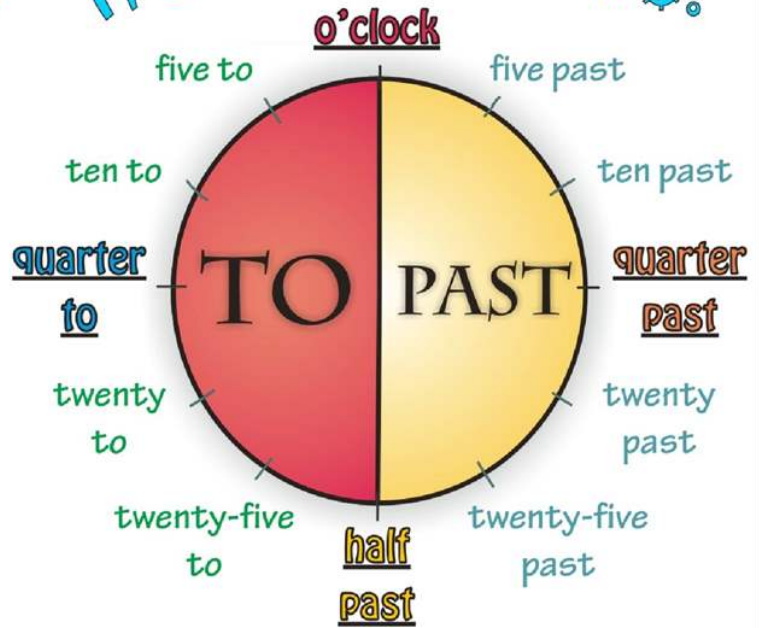


# Telling the time (2)

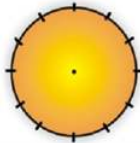
What's the time? It's half past two.

CIRCLE THE CORRECT ANSWER:

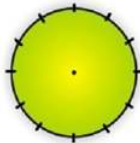
- It's quarter past seven.  
A. 7.15 B. 7.45 C. 8.15
- It's twenty-five to ten.  
A. 9.25 B. 10.25 C. 9.35
- It's half past six.  
A. 6.30 B. 7.30 C. 5.30
- It's five past four.  
A. 3.55 B. 4.05 C. 5.04
- It's ten to nine.  
A. 9.10 B. 9.51 C. 8.50



DRAW TIMES:



It's half past seven.



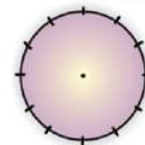
It's twenty past five.

MATCH:

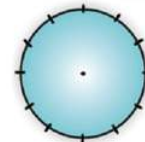
- |                              |       |
|------------------------------|-------|
| It's half past ten.          | 3.10  |
| It's five to nine.           | 7.40  |
| It's twenty to eight.        | 5.50  |
| It's quarter past eleven.    | 10.30 |
| It's twenty-five past seven. | 11.15 |
| It's ten to six.             | 7.25  |
| It's ten past three.         | 1.45  |
| It's quarter to two.         | 8.55  |

WRITE SENTENCES:

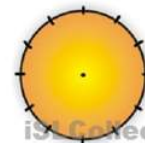
- 12.00 .....
- 6.30 .....
- 4.15 .....
- 1.45 .....
- 8.10 .....
- 11.50 .....
- 6.40 .....
- 3.20 .....
- 5.25 .....



It's quarter to six.



It's ten to ten.



It's five to two.